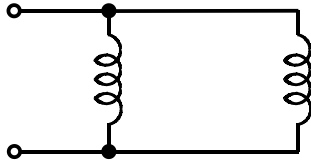


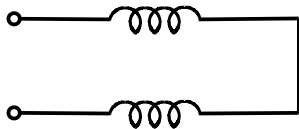
EE/EET 2240
Homework Problem #045

All inductors shown below are 12 mH. For each case, determine the equivalent inductance.

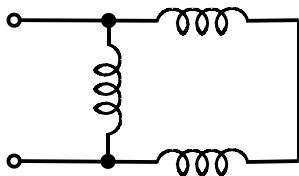
a.



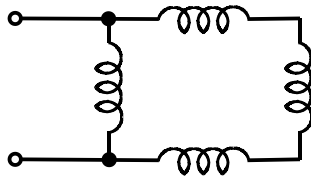
b.



c.



d.



e.

